

トランプカードで「正負の数」を学ぼう！ No. 1

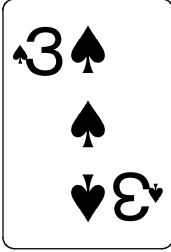

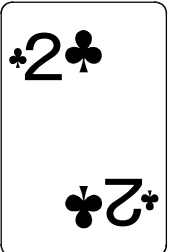

用意するもの：トランプ





教科書 中学1年 P27


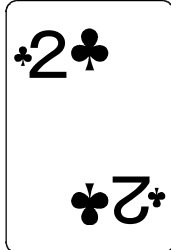

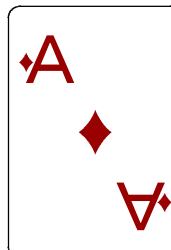
★ルール

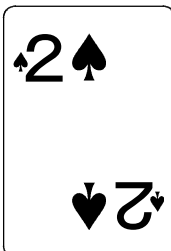


- ① 黒の ♠、♣ のマークのカードは正の数の点数、
赤の ♥、♦ のマークのカードは負の数の点数で
表すことにします。

次のカードの点数は、何点になるでしょうか。また、和は何点になるでしょうか。

①  ②  ③  





④   ⑤  

⑥   ⑦  

⑧   

ルールがわかったら
自分で問題を作って
考えてみよう。



⑨    

- <答え> ① +3 ② -4 ③ +2と+5で+7 ④ -3と-3で-6
⑤ +1と-1で0 ⑥ -5と+2で-3 ⑦ +4と-1で+3
⑧ +2と+5と-2で+5 ⑨ +3と-5と+4と+4で+6